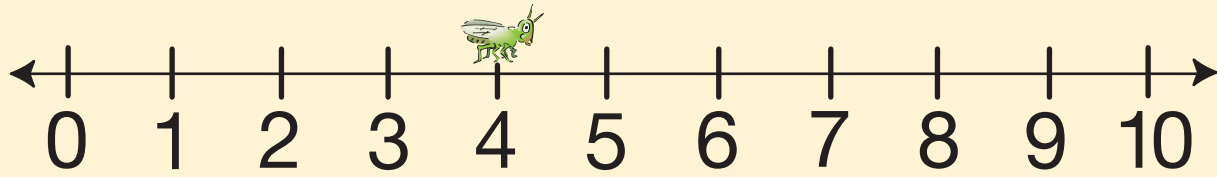
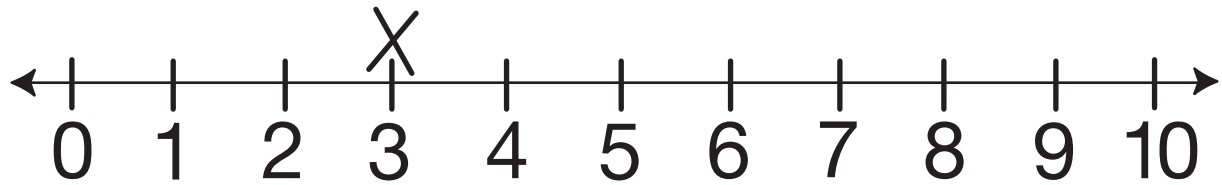


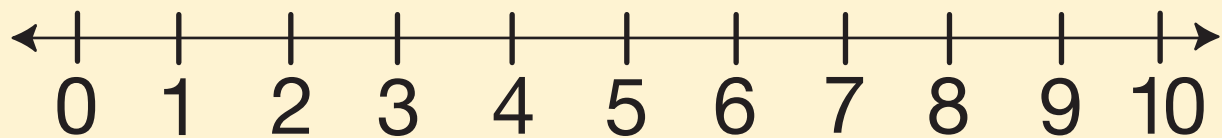
E. Start at 4. Move 3 units. Where do you land? _____



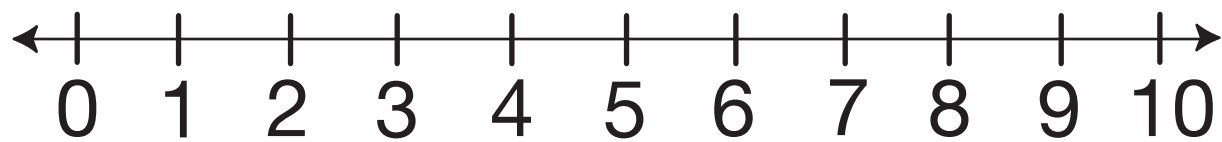
F. Start at 3. Move 3 units. Where do you land? _____



**G. Start at 0. Put an X where you start. Move 6 units.
Where do you land? _____**



**H. Start at 6. Put an X where you start. Move 3 units.
Where do you land? _____**



**I. Start at 8. Put an X where you start. Move 2 units.
Where do you land? _____**

