













6.

 2	 5	 3
		

7.

 2	 8	 0
		

8.

 4	 5	 6
		

**Checking Pockets
Feedback Box**

	Expectation	Check In	Comments
Solve addition problems using the counting-on strategy.	E5		
Show addition situations with number sentences.	E6		
Show addition word problems.	E7		