

Pockets at Home






Dear Family Member:

Your child has been solving addition problems about the total number of pockets on outfits. Encourage your child to use counters to help solve the following problems. Help your child to count on from the larger number of pockets rather than counting all or counting from one each time.

Thank you.




Find the total number of pockets for each. Then write a number sentence on the line.

Ex.




 4	 4
 8	

$$4 + 4 = 8$$



1.

 3	 4
	

2.

 2	 0
	

3.

 4	 2
