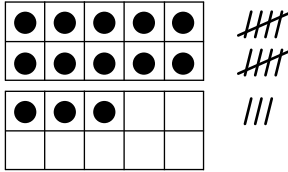



Teacher Guide

More Ten Frames, Number Lines, and Tallies
(TG pp. 1–2)
Homework
Questions 1–4


1. 13




2. 15



3. 11



4. 16



Copyright © Kendall Hunt Publishing Company

Name _____ Date _____

More Ten Frames, Number Lines, and Tallies

Homework

Dear Family Member:
Your child is using ten frames to represent numbers. Ten frames, a number line, and tallies show 18 in the box below. Each row of a ten frame is filled in completely before the next row is used. Thank you.

Show the number of hops on the number line three other ways.

Ways to show 18

1.

Copyright © Kendall Hunt Publishing Company

TG • Grade 1 • Unit 3 • Lesson 6 Homework Master

Teacher Guide - Page 1

Name _____ Date _____

2.

3.

4.

Copyright © Kendall Hunt Publishing Company

Homework Master TG • Grade 1 • Unit 3 • Lesson 6 2

Teacher Guide - Page 2