

Name _____ Date _____

Animals in the Pet Shop



The Pet Shop SAB • Grade 1 • Unit 4 • Lesson 2 **67**

Student Activity Book

Animals in the Pet Shop (SAB p. 67)

Students' descriptions will vary.*

Student Activity Book - Page 67

Name _____ Date _____

Pets at Home

Use a calculator to solve the following problems.

- Beth's block has three kittens and five puppies. How many pets are on Beth's block? Press the keystrokes below to find out.

3

 +

5

 = _____
- For each problem, fill in the missing keystroke boxes. Then find the answer.
 - Mark's block has 5 dogs and 11 cats. How many dogs and cats does the block have?

5

 + = _____
 - Luis's family has 2 pets. There are 16 other pets in Luis's building. How many pets are in the building?
 + = _____
 - Ana counted 12 dogs and 13 cats on her block. How many pets are there in all?
 = _____
 - Sam has two turtles, five frogs, and six lizards as pets. How many pets does Sam have?
 = _____

The Pet Shop SAB • Grade 1 • Unit 4 • Lesson 2 **69**

Pets at Home (SAB p. 69)

Questions 1–2

- 8
- A. $5 + 11 = 16$

B. $2 + 16 = 18$

C. $12 + 13 = 25$

D. $2 + 5 + 6 = 13$

Student Activity Book - Page 69

*Answers and/or discussion are included in the lesson.

Pet Problems (SAB pp. 71–72)
Questions 1–4





Estimates will vary.

1. $9 + 5 = 14$
2. $8 + 3 = 11$
3. $7 + 6 = 13$
4. $6 + 3 = 9$

Name _____ Date _____

Pet Problems

What is the total number of pets? Think: should the answer be more or less than 10 pets? You may use a ten frame. Mark an X for more or less than 10. Write a number sentence.

birds  cats  dogs  fish 

Example:

More than 10 pets
 Less than 10 pets

| | |
|------|------|
| cats | dogs |
| 5 | 4 |
| pets | |
| 9 | |

$5 + 4 = 9$

1.

More than 10 pets
 Less than 10 pets

| | |
|-----------|------|
| birds | fish |
| 9 | 5 |
| pets | |
| $9 + 5 =$ | |

Copyright © Kendall Hunt Publishing Company

The Pet Shop

SAB • Grade 1 • Unit 4 • Lesson 2 71

Student Activity Book - Page 71

Name _____ Date _____

2.

More than 10 pets
 Less than 10 pets

| | |
|-------|------|
| birds | cats |
| 8 | 3 |
| pets | |

3.

More than 10 pets
 Less than 10 pets

| | |
|------|------|
| dogs | fish |
| 7 | 6 |
| pets | |

4.

More than 10 pets
 Less than 10 pets

| | |
|-------|------|
| birds | dogs |
| 6 | 3 |
| pets | |

Copyright © Kendall Hunt Publishing Company

72 SAB • Grade 1 • Unit 4 • Lesson 2

The Pet Shop

Student Activity Book - Page 72

*Answers and/or discussion are included in the lesson.