



Student Activity Book


Name _____ Date _____


Cube Totals


For each problem, there are some cubes in a cup and some cubes outside the cup. Find the total number of cubes. Write a number sentence.


1.  $5 + 4 = 9$

2.  $14 + 3 = 17$

3.  $8 + 2 = 10$

4.  $21 + 4 = 25$

5.  $23 + 3 = 26$

6.  $26 + 2 = 28$

Copyright © Kendall Hunt Publishing Company

Counting On to Add

SAB • Grade 1 • Unit 4 • Lesson 4 **81**

Cube Totals (SAB p. 81)

Questions 1–6

- | | |
|------------------|------------------|
| 1. $5 + 4 = 9$ | 2. $14 + 3 = 17$ |
| 3. $8 + 2 = 10$ | 4. $21 + 4 = 25$ |
| 5. $23 + 3 = 26$ | 6. $26 + 2 = 28$ |