

Teacher Guide

Add On Pennies (TG pp. 1–2)

Homework

Questions 1–10

1. $8 + 5 = 13$
2. $12 + 3 = 15$
3. $19 + 5 = 24$

4. $15 + 4 = 19$
5. $23 + 3 = 26$
6. $14 + 4 = 18$
7. $29 + 2 = 31$
8. $25 + 5 = 30$
9. $17 + 4 = 21$
10. $20 + 3 = 23$

Copyright © Kendall Hunt Publishing Company

Name _____ Date _____

Add On Pennies


Homework

Dear Family Member:


In class, your child uses a counting-on strategy to solve problems. For example, to add $11 + 3$, start by saying "11" and then count on, "12, 13, 14." Encourage your child to use counting on to solve the problems below.

Thank you.


How much money will each student have after receiving more pennies? Write a number sentence for each problem.

1. 


_____ + _____ = _____

2. 

_____ + _____ = _____

3. 

_____ + _____ = _____

4. 


_____ + _____ = _____

Copyright © Kendall Hunt Publishing Company


TG • Grade 1 • Unit 4 • Lesson 4 Homework Master

Teacher Guide - Page 1


Name _____ Date _____

5. 


_____ + _____ = _____

6. 


_____ + _____ = _____

7. 


_____ + _____ = _____

8. 

_____ + _____ = _____

9. 

_____ + _____ = _____

10. 

_____ + _____ = _____

Copyright © Kendall Hunt Publishing Company

Homework Master TG • Grade 1 • Unit 4 • Lesson 4 2

Teacher Guide - Page 2