




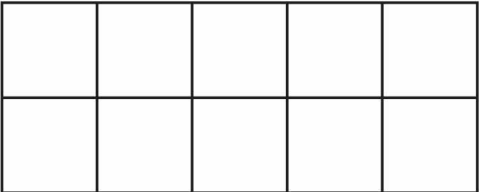
# Pennies and Nickels



Trade as many pennies for nickels as you can. Then count how much money you have. Use coins to help you.

A.   \_\_\_\_\_ cents



\_\_\_\_\_ pennies is the same as \_\_\_\_\_ nickels and \_\_\_\_\_ pennies

B.   \_\_\_\_\_ cents



\_\_\_\_\_ pennies is the same as \_\_\_\_\_ nickel and \_\_\_\_\_ pennies

C.   \_\_\_\_\_ cents

\_\_\_\_\_ pennies is the same as \_\_\_\_\_ nickels and \_\_\_\_\_ pennies

D.   \_\_\_\_\_ cents

\_\_\_\_\_ pennies is the same as \_\_\_\_\_ nickels and \_\_\_\_\_ pennies

E.   \_\_\_\_\_ cents

\_\_\_\_\_ pennies is the same as \_\_\_\_\_ nickels and \_\_\_\_\_ pennies