

Name _____ Date _____

Ten Frames and Pennies

1	2	3	4	5	6	7	8	9	10

5

Copyright © Kendall Hunt Publishing Company

Counting by Fives SAB • Grade 1 • Unit 5 • Lesson 2 93

Student Activity Book

Ten Frames and Pennies (SAB pp. 93–94)

Responses will vary.*


Student Activity Book - Page 93

Name _____ Date _____

Counting Coins


How much money is in each set?

1.




_____ ¢

2.



_____ ¢

3.



_____ ¢

Work with a partner.

4. A. Estimate the pennies in your bag. _____ ¢

B. Count the pennies in your bag. _____ ¢

C. Show or tell how you counted the pennies.

Copyright © Kendall Hunt Publishing Company

Counting by Fives SAB • Grade 1 • Unit 5 • Lesson 2 95

Counting Coins (SAB pp. 95–96)

Questions 1–4

1. 12¢
2. 14¢
3. 23¢
4. A–C.* Responses will vary.

Student Activity Book - Page 95

*Answers and/or discussion are included in the lesson.