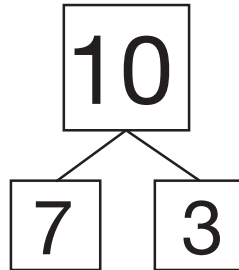
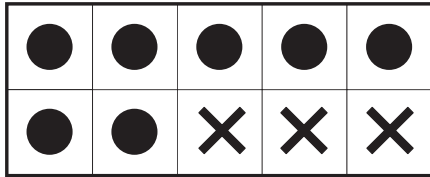


All about Ten

Fill in the ten frame and box diagram to show the two parts of ten.
Write number sentences to match.

Number Sentences

Ex.

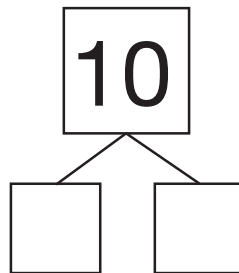
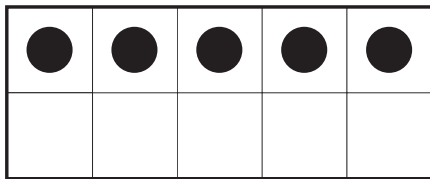


Number Sentences

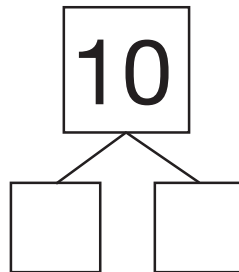
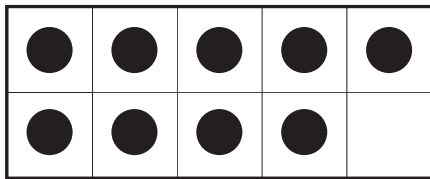
$$7 + 3 = 10$$

$$10 = 3 + 7$$

1.



2.



3.

