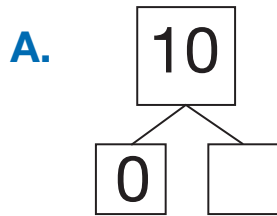
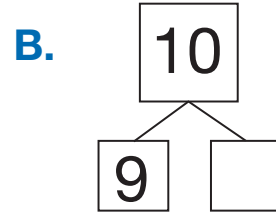
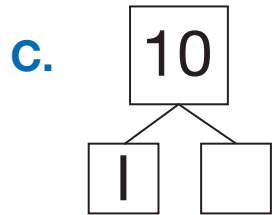


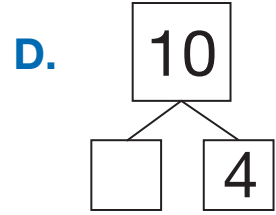
Many Faces of Ten

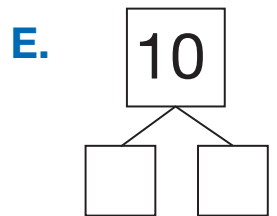
Fill in each box diagram. Write a number sentence. Use cubes, number lines, or ten frames.



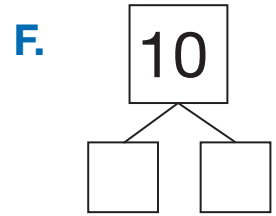






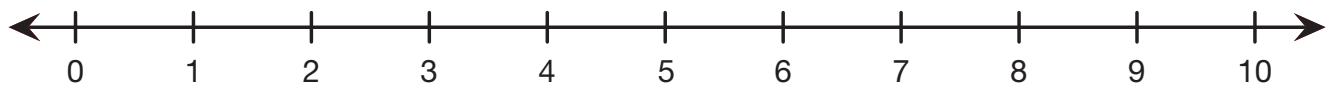
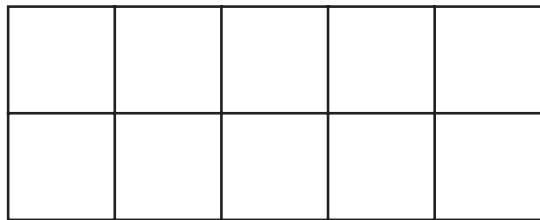


$$10 = \square + 6$$



$$5 + \square = 10$$

G. Show or tell how you solved Question D.



H. Draw or write a story that matches $10 + 1 = \square$.
