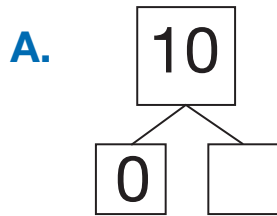
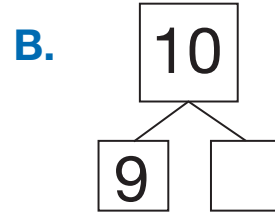
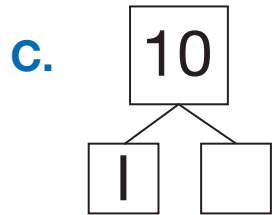


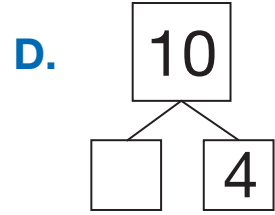
Many Faces of Ten

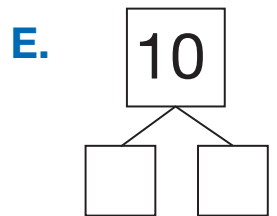
Fill in each box diagram. Write a number sentence. Use cubes, number lines, or ten frames.



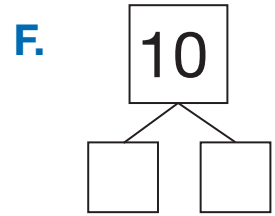








$$10 = \square + 6$$



$$5 + \square = 10$$
