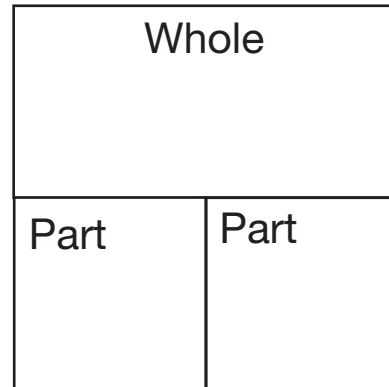



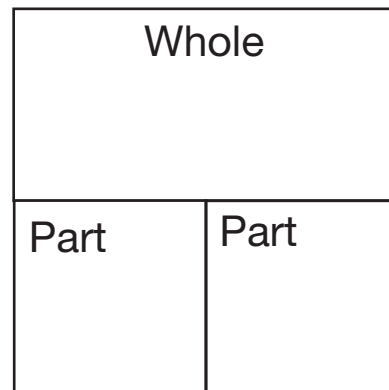
Circus Addition and Subtraction Stories

Read each circus story. Draw a picture to help you solve the problem. Then fill in the part-whole diagram and write a number sentence.

- At the circus, there were 6 monkeys with hats and 3 with no hats. How many monkeys were there in all?



- Later that day, 6 monkeys left the room. How many were left?



- Show or tell how you can use Question 1 to solve Question 2.