


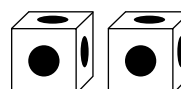
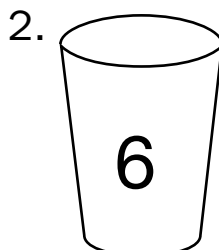
# F Cube Totals




For each problem, there are some cubes in a cup and some cubes outside the cup. Find the total number of cubes. Write a number sentence.



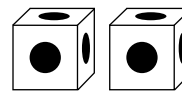
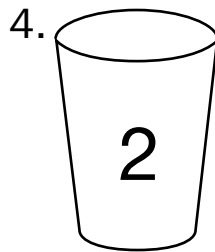
\_\_\_\_\_ + \_\_\_\_\_ = \_\_\_\_\_



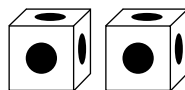
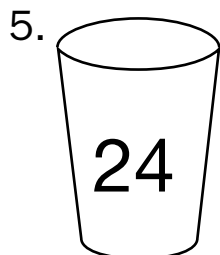
\_\_\_\_\_ + \_\_\_\_\_ = \_\_\_\_\_




\_\_\_\_\_ + \_\_\_\_\_ = \_\_\_\_\_



\_\_\_\_\_ + \_\_\_\_\_ = \_\_\_\_\_



\_\_\_\_\_ + \_\_\_\_\_ = \_\_\_\_\_



\_\_\_\_\_ + \_\_\_\_\_ = \_\_\_\_\_