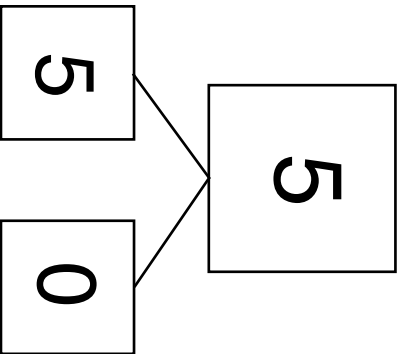
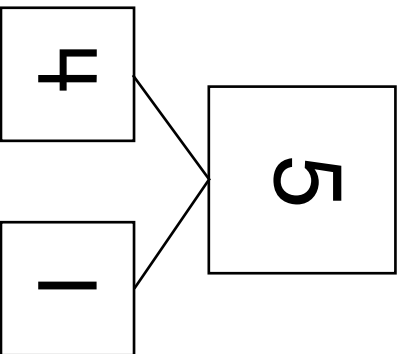


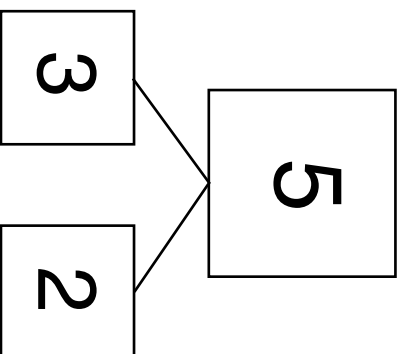
# Partitions of Five



$$\underline{5 + 0 = 5}$$



$$\underline{4 + 1 = 5}$$



$$\underline{3 + 2 = 5}$$

---

---

---