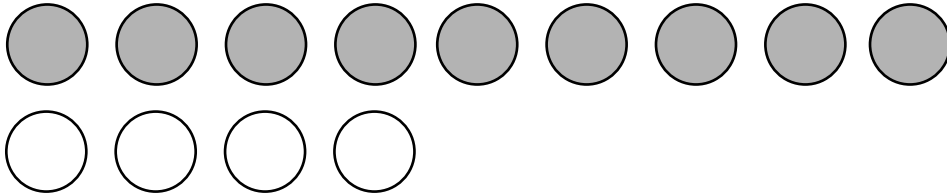
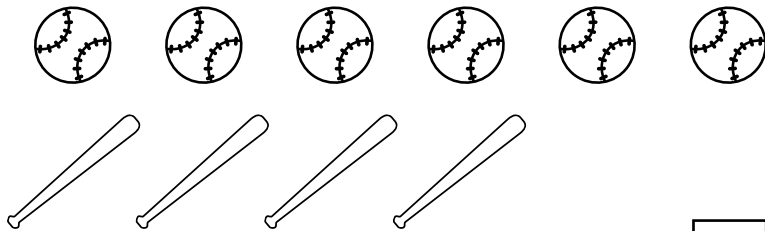


4. How many more  than  ?



$$\square + 4 = 9$$

5. How many more balls  than bats  ?




$$6 = 4 + \square$$

6. How many more Xs than Os ?



$$1 + \square = 4$$

7. How many more birds  than cats  ?



$$8 = 4 + \square$$