

How Many More to Ten



Dear Family Member:

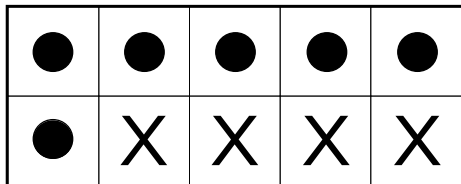
This activity focuses on addition to 10. Since these are important facts to learn, we are using several different ways to show the parts of ten.

Help your child read the word problems below. Then help him or her solve the problems and show the answer in three different ways: using ten frames, in number sentences, and in diagrams. The first one is an example. Your child may use counters like small beans or popcorn to help complete the ten frame.

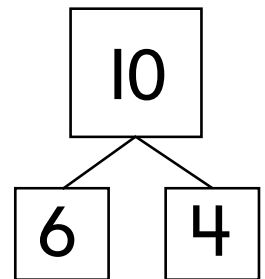
Thank you.

Solve each problem and show your answer in 3 ways.

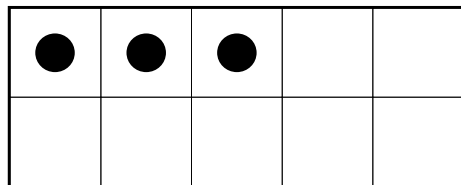
Ex. Linda has 6 books at school. How many more books does she need to make ten?



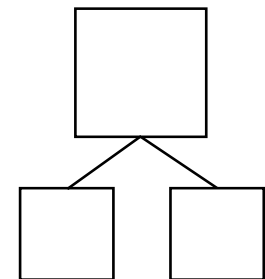
$$\frac{6 + 4 = 10}{\text{number sentence}}$$



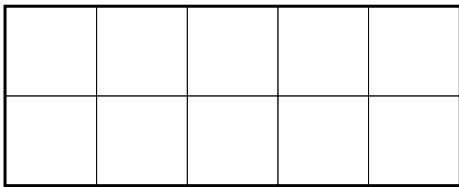
1. Nila needs to cut up 10 apples. She already cut 3 apples. How many more apples does she need to cut?



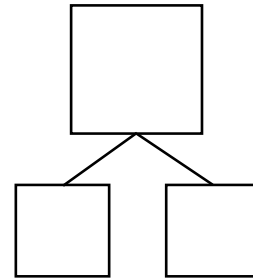
$$\frac{\quad + \quad = \quad}{\text{number sentence}}$$



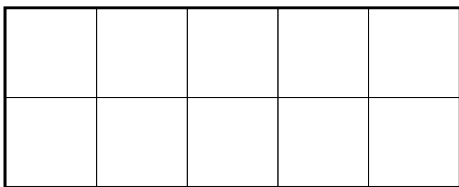
2. Ming's house is 10 miles from school. He walked 2 miles. How far does he still need to walk?



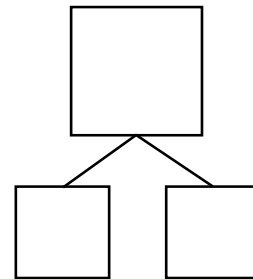
_____ number sentence



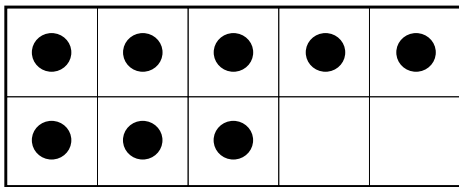
3. Levi chews 5 sticks of gum of his 10 pack. How many more sticks of gum does he have?



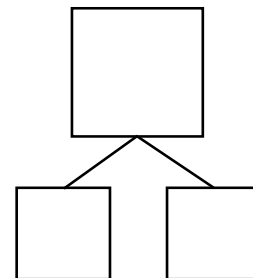
_____ number sentence



4. Write an addition number sentence to match the ten frame below. Fill in the boxes to match.



_____ number sentence



5. Write an addition story to match the number sentence in Question 4.
