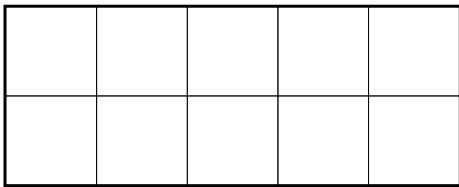
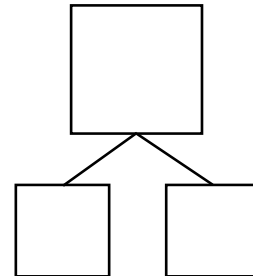


2. Ming's house is 10 miles from school. He walked 2 miles. How far does he still need to walk?



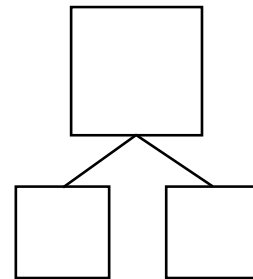
_____ number sentence



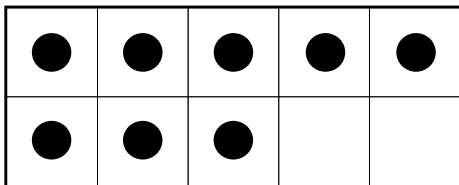
3. Levi chews 5 sticks of gum of his 10 pack. How many more sticks of gum does he have?



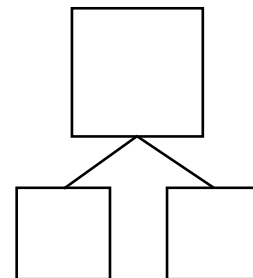
_____ number sentence



4. Write an addition number sentence to match the ten frame below. Fill in the boxes to match.



_____ number sentence



5. Write an addition story to match the number sentence in Question 4.
