

Student Activity Book

How Many More (SAB pp. 151–153)  
Questions 1–6

1. Responses will vary. Possible response: There are **10 moons** and **8 stars**. How many more **moons** than **stars**? Students draw a picture of 10 moons and 8 stars.  
Addition number sentence:  $8 + \boxed{2} = 10$   
Subtraction number sentence:  $10 - 8 = \boxed{2}$
2. Students draw a picture of 7 monkeys and 2 elephants.  
Addition number sentence:  $2 + \boxed{5} = 7$   
Subtraction number sentence:  $7 - 2 = \boxed{5}$
3. Students draw a picture of 9 clowns with blue wigs and 5 clowns with red wigs.  
Addition number sentence:  $5 + \boxed{4} = 9$   
Subtraction number sentence:  $9 - 5 = \boxed{4}$

Name \_\_\_\_\_ Date \_\_\_\_\_

**How Many More**

1. Look at the *At The Circus* page and find two groups of objects to compare.

There are \_\_\_\_\_ and \_\_\_\_\_.

How many more \_\_\_\_\_ than \_\_\_\_\_?

**Draw a picture for your problem. Write 2 number sentences. For each number sentence, draw a box around the number that tells how many more.**

\_\_\_\_\_ addition number sentence      \_\_\_\_\_ subtraction number sentence

Copyright © Kendall Hunt Publishing Company

At the Circus: Compare      SAB • Grade 1 • Unit 6 • Lesson 7      151

Student Activity Book - Page 151

Name \_\_\_\_\_ Date \_\_\_\_\_

**✓ Check-In: Questions 2-6**

**Draw a picture and write number sentences for each problem. For each number sentence, draw a box around the number that tells how many more.**

2. There are 7 monkeys and 2 elephants. How many more monkeys than elephants?

\_\_\_\_\_ addition number sentence      \_\_\_\_\_ subtraction number sentence

3. There are 9 clowns with blue wigs and 5 clowns with red wigs. How many more clown have blue wigs than red wigs?

\_\_\_\_\_ addition number sentence      \_\_\_\_\_ subtraction number sentence

Copyright © Kendall Hunt Publishing Company

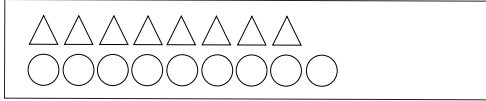
152      SAB • Grade 1 • Unit 6 • Lesson 7      At the Circus: Compare

Student Activity Book - Page 152

Name \_\_\_\_\_ Date \_\_\_\_\_


**Write number sentences for each problem. Draw a box around the number that tells how many more.**

4. How many more circles than triangles?



\_\_\_\_\_ addition number sentence      \_\_\_\_\_ subtraction number sentence

5. How many more boys than girls?



\_\_\_\_\_ addition number sentence      \_\_\_\_\_ subtraction number sentence

6. Draw a line between the addition problem and subtraction problems that go together in a fact family.

- |              |              |
|--------------|--------------|
| $4 + 6 = 10$ | $8 - 2 = 6$  |
| $7 + 2 = 9$  | $7 - 4 = 3$  |
| $6 + 2 = 8$  | $10 - 4 = 6$ |
| $3 + 4 = 7$  | $9 - 4 = 5$  |
| $4 + 5 = 9$  | $9 - 7 = 2$  |

4. Addition number sentence:  $8 + \boxed{1} = 9$   
 Subtraction number sentence:  $9 - 8 = \boxed{1}$
5. Addition number sentence:  $6 + \boxed{2} = 8$   
 Subtraction number sentence:  $8 - 6 = \boxed{2}$
6.  ~~$4 + 6 = 10$        $8 - 2 = 6$~~   
 ~~$7 + 2 = 9$        $7 - 4 = 3$~~   
 ~~$6 + 2 = 8$        $10 - 4 = 6$~~   
 ~~$3 + 4 = 7$        $9 - 4 = 5$~~   
 ~~$4 + 5 = 9$        $9 - 7 = 2$~~


Teacher Guide

Comparing How Many More (TG pp. 1–4)  
Homework  
Questions 1–7

1. Addition number sentence:  $4 + \boxed{3} = 7$   
Subtraction number sentence:  $7 - 4 = \boxed{3}$
2. Addition number sentence:  $4 + \boxed{1} = 5$   
Subtraction number sentence:  $5 - 4 = \boxed{1}$
3. Addition number sentence:  $2 + \boxed{6} = 8$   
Subtraction number sentence:  $8 - 2 = \boxed{6}$

Name \_\_\_\_\_ Date \_\_\_\_\_

### Comparing How Many More



Dear Family Member:

Your child has been learning to use addition and subtraction to compare two groups of things. For example, "There are 8 lions and 5 tigers. How many more lions than tigers?"

Addition number sentence:  $5 + \boxed{3} = 8$


Subtraction number sentence:  $8 - 5 = \boxed{3}$

The number in the box tells how many more.

Thank you.

**Solve each problem. Write an addition and subtraction number sentence for each problem. For each number sentence, draw a box around the number that tells how many more.**

1. There are 7 birds and 4 cats. How many more birds than cats?



\_\_\_\_\_

\_\_\_\_\_

addition number sentence      subtraction number sentence


Copyright © Kendall Hunt Publishing Company

Homework Master TG • Grade 1 • Unit 6 • Lesson 7 |

Teacher Guide - Page 1

Name \_\_\_\_\_ Date \_\_\_\_\_

2. There are 5 boys and 4 girls at a party. How many more boys than girls?

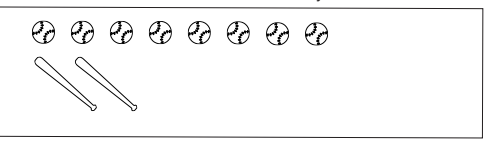


\_\_\_\_\_

\_\_\_\_\_

addition number sentence      subtraction number sentence

3. There are 2 bats and 8 balls. How many more balls than bats?



\_\_\_\_\_

\_\_\_\_\_

addition number sentence      subtraction number sentence

Copyright © Kendall Hunt Publishing Company


2 TG • Grade 1 • Unit 6 • Lesson 7 Homework Master

Teacher Guide - Page 2

**Answer Key • Lesson 7: At the Circus: Compare**


Name \_\_\_\_\_ Date \_\_\_\_\_

4. There are 3 circles and 6 triangles. How many more triangles than circles?



\_\_\_\_\_ addition number sentence      \_\_\_\_\_ subtraction number sentence

5. There are 7 girls and 2 boys. How many more girls than boys?



\_\_\_\_\_ addition number sentence      \_\_\_\_\_ subtraction number sentence

Copyright © Kendall Hunt Publishing Company


Homework Master TG • Grade 1 • Unit 6 • Lesson 7 3

4. Addition number sentence:  $3 + \boxed{3} = 6$   
Subtraction number sentence:  $6 - 3 = \boxed{3}$
5. Addition number sentence:  $2 + \boxed{5} = 7$   
Subtraction number sentence:  $7 - 2 = \boxed{5}$
6. Addition number sentence:  $4 + \boxed{4} = 8$   
Subtraction number sentence:  $8 - 4 = \boxed{4}$
7. Stories and sentences will vary.

**Teacher Guide - Page 3**

Name \_\_\_\_\_ Date \_\_\_\_\_

6. There are 4 bunches of bananas and 8 apples. How many more apples than bunches of bananas?



\_\_\_\_\_ addition number sentence      \_\_\_\_\_ subtraction number sentence

7. Look around your home. Write a story that compares two groups of objects. Write number sentences.

There are \_\_\_\_\_ and \_\_\_\_\_.

How many more \_\_\_\_\_ than \_\_\_\_\_?

\_\_\_\_\_ addition number sentence      \_\_\_\_\_ subtraction number sentence

Copyright © Kendall Hunt Publishing Company

4 TG • Grade 1 • Unit 6 • Lesson 7 Homework Master

**Teacher Guide - Page 4**