

Comparing How Many More



Dear Family Member:

Your child has been learning to use addition and subtraction to compare two groups of things. For example, “There are 8 lions and 5 tigers. How many more lions than tigers?”

Addition number sentence: $5 + \boxed{3} = 8$


Subtraction number sentence: $8 - 5 = \boxed{3}$

The number in the box tells how many more.

Thank you.

Solve each problem. Write an addition and subtraction number sentence for each problem. For each number sentence, draw a box around the number that tells how many more.


1. There are 7 birds and 4 cats. How many more birds than cats?



addition number sentence

subtraction number sentence

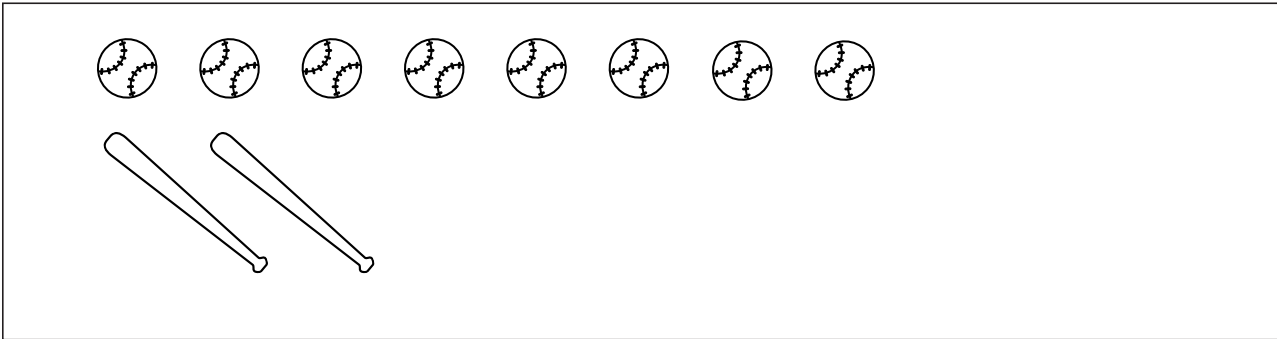
2. There are 5 boys and 4 girls at a party. How many more boys than girls?



addition number sentence

subtraction number sentence


3. There are 2 bats and 8 balls. How many more balls than bats?



addition number sentence

subtraction number sentence


4. There are 3 circles and 6 triangles. How many more triangles than circles?



addition number sentence

subtraction number sentence


5. There are 7 girls and 2 boys. How many more girls than boys?



addition number sentence

subtraction number sentence

6. There are 4 bunches of bananas and 8 apples. How many more apples than bunches of bananas?



addition number sentence

subtraction number sentence

7. Look around your home. Write a story that compares two groups of objects. Write number sentences.

There are _____ and _____.

How many more _____ than _____?

addition number sentence

subtraction number sentence