














Counting Pennies

4. Look at the ten frames below.

					_____
					_____
					_____

A. Trade pennies for nickels. How many nickels do you need?

B. Trade pennies for dimes. How many dimes do you need?

C. How many leftover pennies are there?

D. How much money is in the ten frames?
