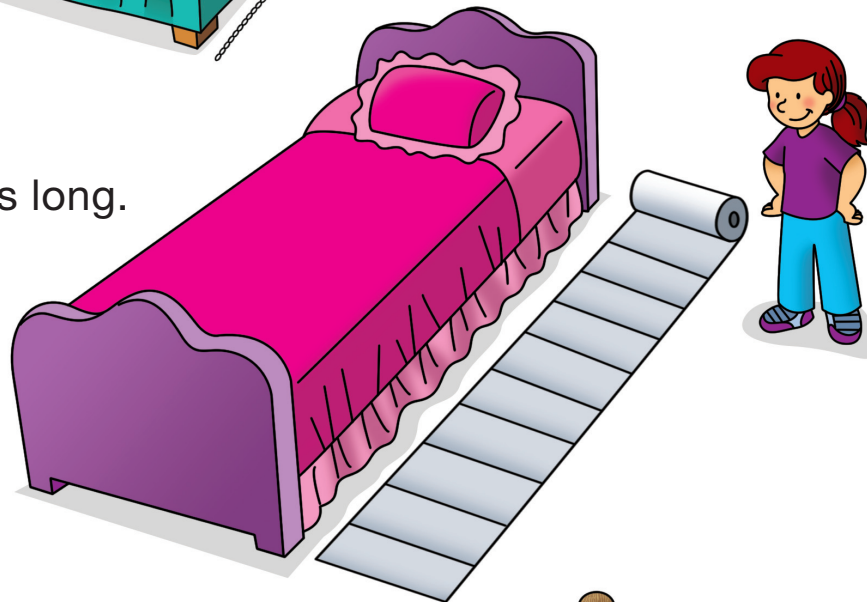


# Tiny Beds


Mario's bed is 59 paper clips long.



Fran's bed is 10 paper towels long.



Rob's bed is 8 shoes long.



Name \_\_\_\_\_ Date \_\_\_\_\_

1. Why does Mario think the other beds are tiny?

---

---

2. How could you find out whose bed is really longest?

---

---

3. Who did the best job of measuring? Why do you think so?

---

---

4. How could you help Mario and Rob take better measurements?

Mario \_\_\_\_\_


---

Rob \_\_\_\_\_

---

 **Check-In: Question 5**

5. Fran measured her bed with her pencil.  
It was 18 pencils long.



Mario measured his bed with his pencil.  
It was 18 pencils long.



Whose bed is longer? \_\_\_\_\_  
Show or tell how you know.