












Part 5 Trade Coins

Trade as many pennies for nickels and dimes as you can. Then count how much money you have. The first one is an example. Use real money to help you.

Example











				
				




				

_____ cents

11 pennies is the same as 1 dime 0 nickels and 1 penny.

1.











				
				









				

_____ cents

_____ pennies is the same as _____ dime _____ nickels and _____ pennies.

2.

_____ cents

_____ pennies is the same as _____ dime _____ nickels and _____ pennies.