


Name _____ Date _____

Measuring Our World

How do these items in Maria's classroom compare with those things in your classroom? Measure to find out.


Maria's desk is 18 links tall.

1. My desk is _____ links tall.

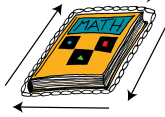


Maria's desk is 16 links long.

2. My desk is _____ links long.



Maria measured the distance around her math book. The distance around an object is called the **perimeter**. The perimeter of Maria's math book is 39 links.



3. The perimeter of my math book is _____ links.

Copyright © Kendall Hunt Publishing Company

Measure with Links SAB • Grade 1 • Unit 7 • Lesson 2 **173**

Student Activity Book - Page 173


Name _____ Date _____

Measuring Ourselves

✓ **Check-In: Questions 4-9**


Julio's arm is 12 links long.

4. My arm is _____ links long.



Julio's foot is 5 links long.

5. My foot is _____ links long.



6. Use links to measure another part of your body. Draw a picture to show what and how you measure.

Copyright © Kendall Hunt Publishing Company

My _____ is _____ links long.

174 SAB • Grade 1 • Unit 7 • Lesson 2 **Measure with Links**

Student Activity Book - Page 174

Student Activity Book

Measuring Our World (SAB pp. 173–175)

Questions 1–9

1–2. * Answers will vary.

3. * $6 + 6 + 8 + 8 = 28$ links

4–6. Answers will vary.


7. A. Mark's
B. Josh's
C. 2 links
D. 3 links
E. Possible response: I started with 11 links and counted on 3 more to get to 14.

8. crazy

9. could be

Name _____ Date _____

7. Mark, Josh, and Sara each measured their arm. Include labels.



A. Whose arm is shortest? _____

B. Whose arm is longest? _____

C. How much longer is Sara's arm than Mark's arm?

D. How much shorter is Mark's arm than Josh's arm?

E. Show or tell how you solved Question D.

Circle your answer.

8. Frank said his hand is 12 links long. Could be or crazy?

9. Anna said her hand is 4 links long. Could be or crazy?

Copyright © Kendall Hunt Publishing Company

Measure with Links SAB • Grade 1 • Unit 7 • Lesson 2 **175**

Student Activity Book - Page 175

*Answers and/or discussion are included in the lesson.

Teacher Guide

Links at Home (TG)

Homework

Questions 1–7

1. crazy
2. could be
3. could be
4. could be
5. crazy
6. Answers will vary.
7. Answers will vary.

Name _____ Date _____

Links at Home

Dear Family Member:
We are using links to estimate and measure lengths. Please help your child read each of the measurements below.
Thank you.

Read each sentence below. Decide whether each one *could be possible* or seems *crazy*. Circle your answer. Use the picture of five links to help you.

1. A big toe is 5 links long.	could be	crazy
2. A pencil is 5 links long.	could be	crazy
3. An adult's foot is 8 links long.	could be	crazy
4. A table top is 35 links from the floor.	could be	crazy
5. A doorknob is 100 links from the floor.	could be	crazy
6. Name something that could be 10 links long.		

7. Name something for which 10 links is a crazy measurement.		

Copyright © Kendall Hunt Publishing Company

Homework Master TG • Grade 1 • Unit 7 • Lesson 2

Teacher Guide