


Name \_\_\_\_\_ Date \_\_\_\_\_

### Measuring Our World

**How do these items in Maria's classroom compare with those things in your classroom? Measure to find out.**


Maria's desk is 18 links tall.

1. My desk is \_\_\_\_\_ links tall.

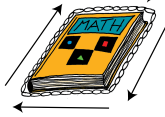


Maria's desk is 16 links long.

2. My desk is \_\_\_\_\_ links long.



Maria measured the distance around her math book. The distance around an object is called the **perimeter**. The perimeter of Maria's math book is 39 links.



3. The perimeter of my math book is \_\_\_\_\_ links.

Copyright © Kendall Hunt Publishing Company

Measure with Links SAB • Grade 1 • Unit 7 • Lesson 2 **173**

**Student Activity Book - Page 173**


Name \_\_\_\_\_ Date \_\_\_\_\_

### Measuring Ourselves

✓ **Check-In: Questions 4-9**


Julio's arm is 12 links long.

4. My arm is \_\_\_\_\_ links long.



Julio's foot is 5 links long.

5. My foot is \_\_\_\_\_ links long.



6. Use links to measure another part of your body. Draw a picture to show what and how you measure.

Copyright © Kendall Hunt Publishing Company

My \_\_\_\_\_ is \_\_\_\_\_ links long.

174 SAB • Grade 1 • Unit 7 • Lesson 2 **Measure with Links**

**Student Activity Book - Page 174**

### Student Activity Book

## Measuring Our World (SAB pp. 173–175)

### Questions 1–9

1–2. \* Answers will vary.

3. \*  $6 + 6 + 8 + 8 = 28$  links

4–6. Answers will vary.

7. A. Mark's  
B. Josh's  
C. 2 links  
D. 3 links  
E. Possible response: I started with 11 links and counted on 3 more to get to 14.


8. crazy

9. could be

---

Name \_\_\_\_\_ Date \_\_\_\_\_

7. Mark, Josh, and Sara each measured their arm. Include labels.



A. Whose arm is shortest? \_\_\_\_\_

B. Whose arm is longest? \_\_\_\_\_

C. How much longer is Sara's arm than Mark's arm?  
\_\_\_\_\_

D. How much shorter is Mark's arm than Josh's arm?  
\_\_\_\_\_

E. Show or tell how you solved Question D.

**Circle your answer.**

8. Frank said his hand is 12 links long. Could be or crazy?

9. Anna said her hand is 4 links long. Could be or crazy?

Copyright © Kendall Hunt Publishing Company

Measure with Links SAB • Grade 1 • Unit 7 • Lesson 2 **175**

**Student Activity Book - Page 175**

\*Answers and/or discussion are included in the lesson.