



# Find Area with Square Units


Find the area of each.

 1 square unit


**A.**  \_\_\_\_\_ square units

**B.**  \_\_\_\_\_ square units

**C.**  \_\_\_\_\_ square units

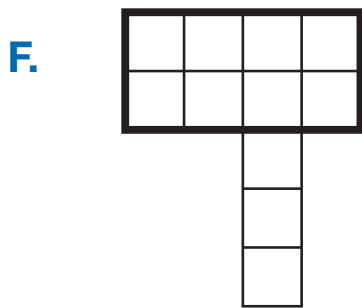
**D.**  \_\_\_\_\_ square units

**Find the area of each part of the figures. Add the parts to find the total area. Write a number sentence.**



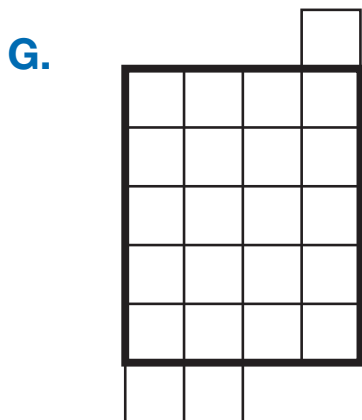
\_\_\_\_\_ square units  
Write a number sentence.

$9 + 4 = \square$



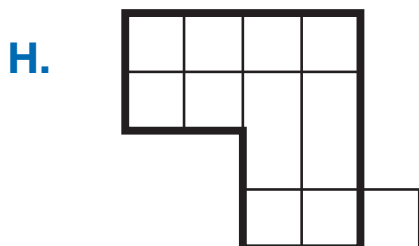
\_\_\_\_\_ square units  
Write a number sentence.

\_\_\_\_\_



\_\_\_\_\_ square units  
Write a number sentence.

\_\_\_\_\_



\_\_\_\_\_ square units  
Write a number sentence.

\_\_\_\_\_