
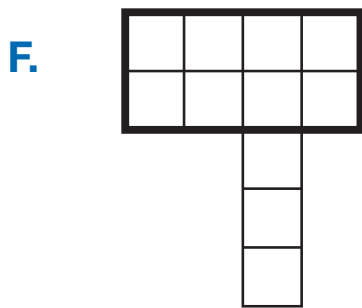


Find the area of each part of the figures. Add the parts to find the total area. Write a number sentence.

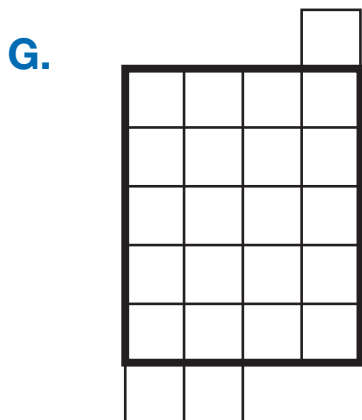


_____ square units
Write a number sentence.

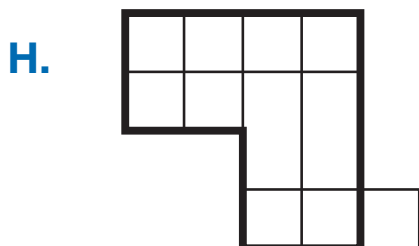
$9 + 4 = \square$



_____ square units
Write a number sentence.



_____ square units
Write a number sentence.



_____ square units
Write a number sentence.
