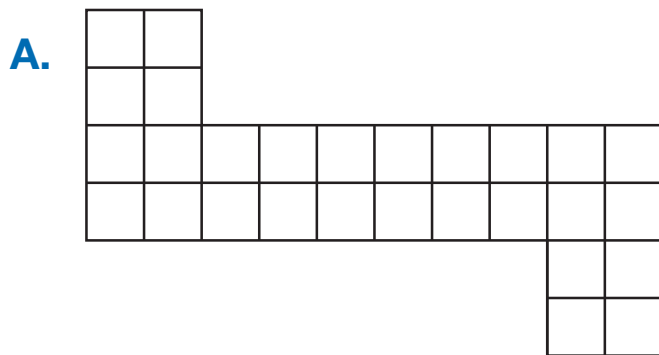



Which Two Are the Same

Find the area of each shape. Divide the shapes and skip count whenever you can. Write a number sentence to show how you broke up the shape.


 1 square unit



_____ square units
Write a number sentence.



_____ square units
Write a number sentence.



_____ square units
Write a number sentence.

D. Which two shapes have the same area?

E. Which shape has the largest area?
