

**I Math Facts: Group D**



Fill in the missing numbers to make the number sentences true.

1.  $3 + 3 = \square$

2.  $3 + 4 = \square$

3.  $\square = 4 + 4$



4.  $\square = 4 + 5$

5. How can you use  $4 + 4$  to solve  $4 + 5$ ?

**J Piggy Banks**





Finish each sentence.



1. \_\_\_\_\_ dimes, \_\_\_\_\_ nickels,  
and \_\_\_\_\_ pennies

2. \_\_\_\_\_ nickels and \_\_\_\_\_ pennies



3. \_\_\_\_\_ dimes, \_\_\_\_\_ nickel,  
and \_\_\_\_\_ pennies

4. \_\_\_\_\_ nickels and \_\_\_\_\_ pennies