

Student Activity Book

Compare to 10 Links (SAB p. 217)
Questions 1–3

Answers will vary

Name _____ Date _____

Compare to 10 Links

Measure an object with links. Complete each statement.

1. Greater than 10 links
 The _____ is _____ links.
 _____ links is greater than 10 links.
 10 links is less than _____ links.

2. Less than 10 links
 The _____ is _____ links.
 _____ links is less than 10 links.
 10 links is greater than _____ links.

3. Equal to 10 links
 The _____ is 10 links.
 _____ links is equal to 10 links.

Copyright © Kendall Hunt Publishing Company


Compare SAB • Grade 1 • Unit 8 • Lesson 5 217

Student Activity Book - Page 217


Name _____ Date _____

Use Symbols


Draw a square around the greater number. Circle the symbol.



24 inches tall



36 inches tall



15 inches tall

A. 36

is greater than
>
is less than
<

 24

B. 24


is greater than
>
is less than
<

 15


C. 15

is greater than
>
is less than
<


 36



15 inches wide



6 inches wide



10 inches wide

D. 6

is greater than
>
is less than
<

 10

E. 15

is equal to
=
is less than
<

 15

F. 10

is greater than
>
is less than
<

 6

Compare SAB • Grade 1 • Unit 8 • Lesson 5 219


Use Symbols (SAB pp. 219–220)

Questions A–N


- A. $36 > 24$ B. $24 > 15$ C. $15 < 36$
 D. $6 < 10$ E. $15 = 15$ F. $10 > 6$
 G. $15 < 16$ H. $8 < 16$ I. $8 = 8$
 J. Answers will vary.
 K. Answers will vary.
 L. Answers will vary.
 M. Answers will vary.
 N. Answers will vary.


Student Activity Book - Page 219

Name _____ Date _____





8 Links






15 Links





16 Links



G. 15

is greater than
>
is less than
<

 16

H. 8

is greater than
>
is less than
<

 16

I. 8

is greater than
>
is equal to
=

 8

Fill in each statement.

J. $36 < \underline{\hspace{1cm}}$ K. $9 > \underline{\hspace{1cm}}$ L. $\underline{\hspace{1cm}} = \underline{\hspace{1cm}}$

Choose two numbers and compare them.

M. $\underline{\hspace{1cm}} \bigcirc \underline{\hspace{1cm}}$ N. $\underline{\hspace{1cm}} \bigcirc \underline{\hspace{1cm}}$

220 SAB • Grade 1 • Unit 8 • Lesson 5 Compare

Student Activity Book - Page 220