




# Comparing Fall and Winter Skies

Record your data for each month's weather in the data table.

## Comparing Skies

<i>T</i> Type of Sky _____	<i>N</i> Number of Days	
	_____ month	_____ month
		
		
		

Use your data table or bar graphs to answer the questions.

1. **A.** Which month had more sunny days? \_\_\_\_\_
- B.** How many more? \_\_\_\_\_
- C.** Is this a big difference or a small difference?  
\_\_\_\_\_