

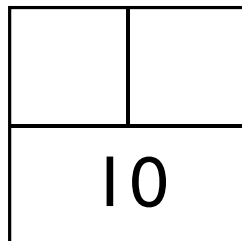
**Part 3 Break Apart the Numbers**

Write the missing number in the number sentence. Complete each part-whole diagram to match the number sentence.

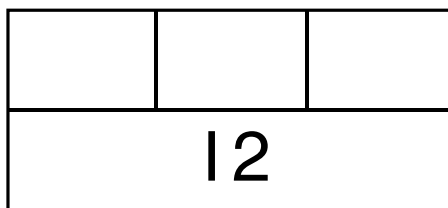
**Number Sentence**

**Part-Whole Diagram**

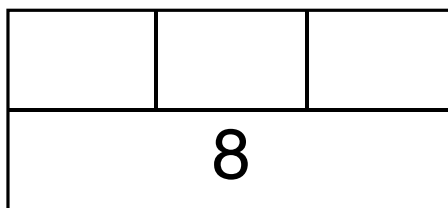
1.  $10 = 7 + \square$



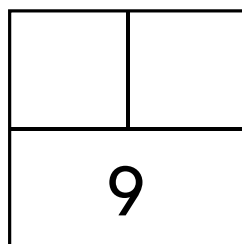
2.  $12 = 5 + \square + 2$



3.  $8 = \square + 2 + 2$



4.  $9 = \square + 4$



5.  $11 = 4 + \square + 1$

