


Showing Teens

Fill in how many tens, ones, or the total number shown in each drawing.

1.



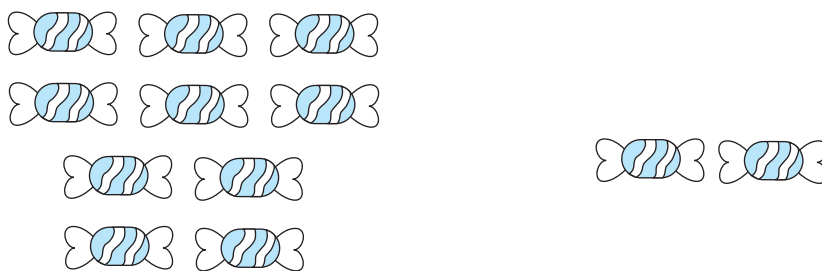
1 group of 10 and 4 ones left over is _____.

2.



1 group of 10 and 9 ones left over is _____.

3.



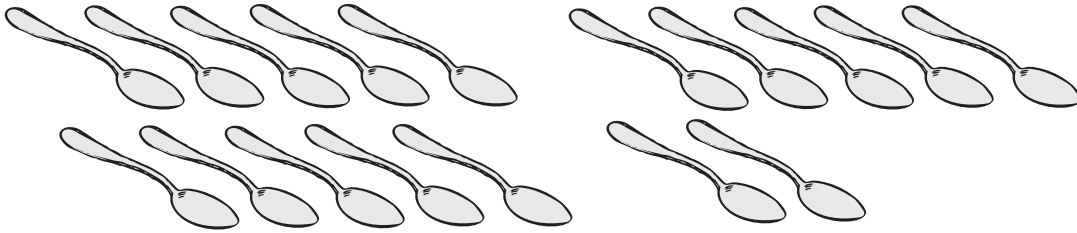
12 is _____ group of ten and _____ ones left over.

4.



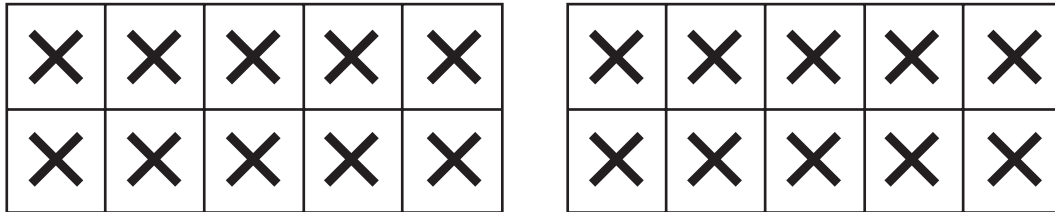
15 is _____ group of ten and _____ ones left over.

5.



_____ group of ten and _____ more is _____.

6.



_____ groups of ten and _____ more is _____.

Fill in and draw a picture to match each sentence.

7.

11 is _____ group of ten and _____ one left over.

8.

_____ is 1 group of ten and 3 ones left over.