



K Measure in Inches



1. Measure the pencils in inches.



Pencil A is _____ inches long.

Pencil B is _____ inches long.

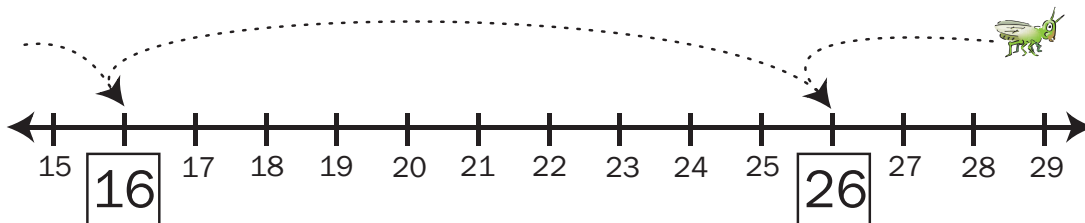
2. How much longer is B than A? _____ inches

3. Show or tell how you solved Question 2.

L Hopping by Tens



The math hopper is hopping by tens. Where will it land on the next two hops after 16?



16 — —