

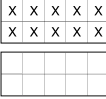
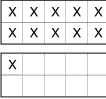
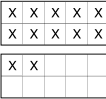
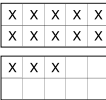
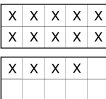


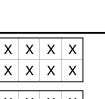
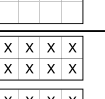

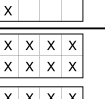
Student Activity Book

What Makes a Teen (SAB pp. 281–282)

	Number of Groups of 10	Number of Ones Left Over	Number
*	1	0	10
	1	1	11
	1	2	12
	1	3	13
	1	4	14
	1	5	15
	1	6	16
	1	7	17
	1	8	18
	1	9	19
	2	0	20

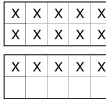



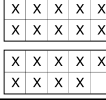
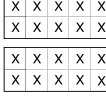



Name _____ Date _____

What Makes a Teen

	Number of Groups of 10	Number of Ones Left Over	Number
			
			
			
			
			
			
			
			
			
			
			

The Teens **SAB • Grade 1 • Unit 10 • Lesson 1** **281**

Student Activity Book - Page 281

	Number of Groups of 10	Number of Ones Left Over	Number
			
			
			
			
			
			
			
			
			

282 **SAB • Grade 1 • Unit 10 • Lesson 1** **The Teens**


Student Activity Book - Page 282


*Answers and/or discussion are included in the lesson.


Name _____ Date _____


Showing Teens

Fill in how many tens, ones, or the total number shown in each drawing.

1.  1 group of 10 and 4 ones left over is _____.

2.  1 group of 10 and 9 ones left over is _____.

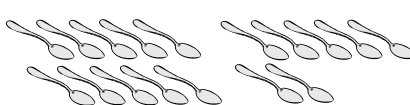
3.  12 is _____ group of ten and _____ ones left over.

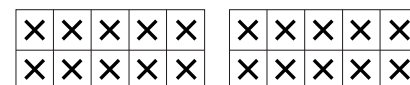
4.  15 is _____ group of ten and _____ ones left over.

Copyright © Kendall Hunt Publishing Company

The Teens SAB • Grade 1 • Unit 10 • Lesson 1 283

Student Activity Book - Page 283

5.  _____ group of ten and _____ more is _____.

6.  _____ groups of ten and _____ more is _____.

Fill in and draw a picture to match each sentence.

7. _____ is _____ group of ten and _____ one left over.

8. _____ is 1 group of ten and 3 ones left over.

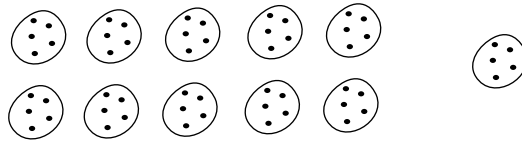
Copyright © Kendall Hunt Publishing Company

284 SAB • Grade 1 • Unit 10 • Lesson 1 The Teens

Student Activity Book - Page 284

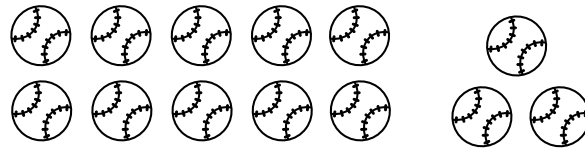
**Showing Tens (SAB pp. 283–284)
Questions 1–8**

1. 1 group of 10 and 4 ones left over is 14.
2. 1 group of 10 and 9 ones left over is 19.
3. 12 is 1 group of ten and 2 ones left over.
4. 15 is 1 group of ten and 5 ones left over.
5. 1 group of ten and 7 more is 17.
6. 2 groups of ten and 0 more is 20.
7. Possible drawing:



11 is 1 group of ten and 1 one left over.

8. Possible drawing:



13 is 1 group of ten and 3 ones left over.