

Student Activity Book

Name _____ Date _____

Comparing Names



Make a tower of cubes to show the number of letters in each name of the students in this group. Fill in the table to show how many letters are in each name.

First Name	Number of Letters
Michael	
Irma	
Linda	
Nicholas	

Look at the number of letters in the table above.

1. What is the smallest number of letters? _____
2. What is the largest number of letters? _____

Combine the cubes to find the total number of letters in this group. Fill in the spaces in the sentence.

3. Total letters: _____
4. There are _____ groups of ten and _____ ones left over.

Copyright © Kendall Hunt Publishing Company


Comparing Names (SAB pp. 289–290)
Questions 1–12

1. 4
2. 8
3. 24
4. 2, 4
5. more
6. Possible response: There are 4 tens, or 40, but $3 + 7$ is another ten and then there's 6 more ones so it's more than 50.
7. less
8. Possible response: There are 4 tens, or 40, but $5 + 1$ is only 6. The ones don't make another ten so that's less than 50.
9. 32
10. 13
11. 23
12. A. $32 > 30$ B. $32 < 40$ C. $26 = 26$
D. $23 < 30$ E. $23 > 13$ F. $13 < 20$

Student Activity Book - Page 289


Name _____ Date _____

Look the number of letters in the names from other groups. Each group built cube towers. Use your 100 Chart.



5. Is the total more or less than 50?

6. How do you know?



7. Is the total more or less than 50?

8. How do you know?

Compare these numbers: 13, 23, 26, 32.

9. _____ is between 30 and 40.
10. _____ is between 10 and 20.
11. _____ is closest to 20.
12. Fill in each circle with $<$, $>$ or $=$.
A. $32 \bigcirc 30$ B. $32 \bigcirc 40$ C. $26 \bigcirc 26$
D. $23 \bigcirc 30$ E. $23 \bigcirc 13$ F. $13 \bigcirc 20$

Copyright © Kendall Hunt Publishing Company

Student Activity Book - Page 290

Copyright © Kendall Hunt Publishing Company


Teacher Guide

**How Many Letters (TG)
Homework**

Answers will vary.

Name _____ Date _____

How Many Letters



Write the first names of four people or pets you know. Write the number of letters in each name.

First Name	Number of Letters

Total Number of Letters _____

Draw a picture or tell how you found the total number of letters.

Copyright © Kendall Hunt Publishing Company

Return this sheet to school by _____.

Homework Master **TG • Grade 1 • Unit 10 • Lesson 3**

Teacher Guide