



2. Write the time that is on each clock.

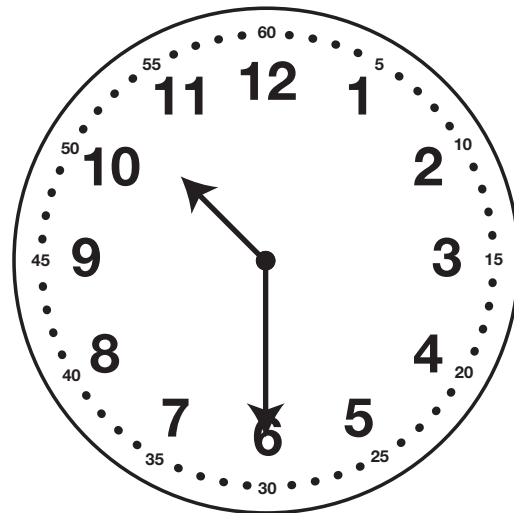


_____ : _____



_____ : _____

3. Joe and Moe are looking at this clock. Joe says that it is 10:30. Moe does not agree. Moe says, "It cannot be 10:30 because the minute hand is pointing at the 6." Do you agree with Joe or Moe? Show or tell why.



Hour and Half Hour Feedback Box	Expectation	Check In	Comments
Recognize the relationship between minutes and hours [Q# 3].	E8		
Read and write time to the nearest hour and half hour [Q# 1-2].	E10		