


Lola's Dimes


Use a 100 Chart and ten frames.

- Help Lola put 10 dimes into two groups. Some dimes are showing. Draw the others. Write number sentences and labels.




_____ + _____ = _____

Use ¢ to show what the numbers mean.



_____ + _____ = _____



_____ + _____ = _____