

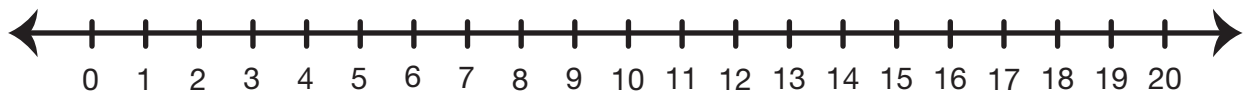
# Nan and Bert Problems

Show or tell how to solve each problem. Write a number sentence. Use cubes, a number line, or ten frames. You may also draw a picture.

1. Nan and Bert went on a picnic at the lake. Nan ate 9 grapes and Bert ate 5. How many did they eat altogether?

Number sentence \_\_\_\_\_

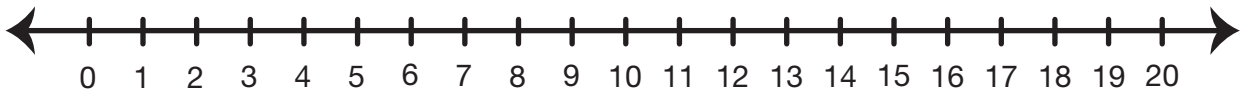




2. Grandma packed 15 baby carrots. Nan and Bert ate them all. If Nan ate 7, how many did Bert eat?

Number sentence \_\_\_\_\_

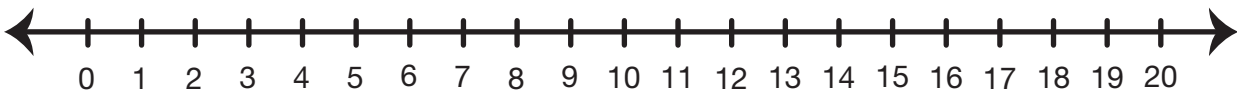




3. Grandma's ticket to the zoo cost \$6. Nan and Bert's each cost \$4. How much did all 3 tickets cost?

Number sentence \_\_\_\_\_

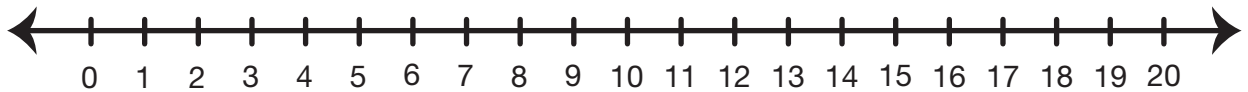




4. At the gift shop, Bert spent \$16 and Nan spent half that much. How much did Nan spend?

Number sentence \_\_\_\_\_





5. Nan and Bert each brought a package of 8 crackers for a snack. How many crackers do they have altogether?

Number sentence \_\_\_\_\_



