

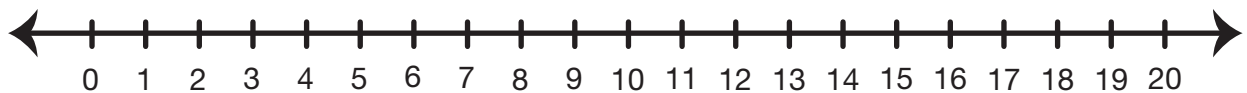
More Nan and Bert Problems

Show or tell how to solve each problem. Write a number sentence. Use cubes, a number line, or ten frames. You may also draw a picture.

Check-In: Questions 1–3

- At the zoo, Bert counted 9 turtles on one rock. Nan counted 5 in the water. How many turtles did they count?

Number sentence _____



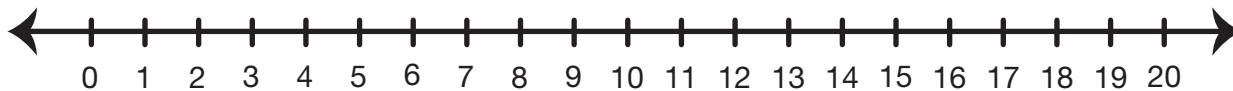
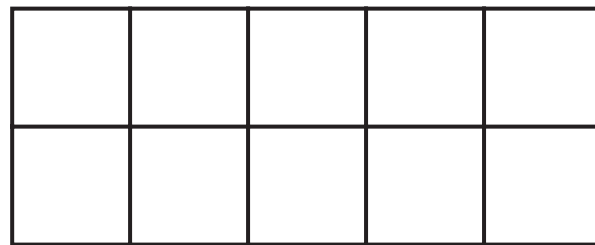
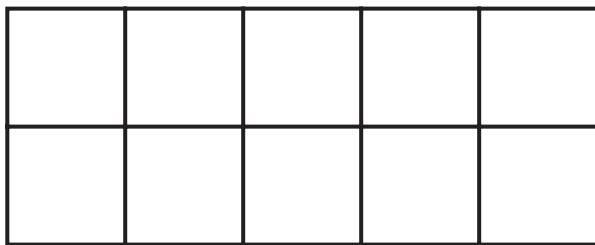
Name _____ Date _____

2. Nan swam in the lake for 11 minutes. Bert swam for 8 minutes.

Who swam longer? _____

How much longer? _____

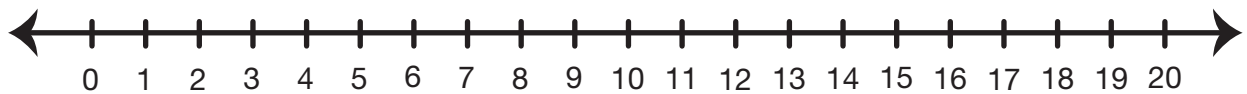
Number sentence _____



Copyright © Kendall Hunt Publishing Company

3. Nan and Bert each ate 7 nuts on the picnic. How many did they eat altogether?

Number sentence _____



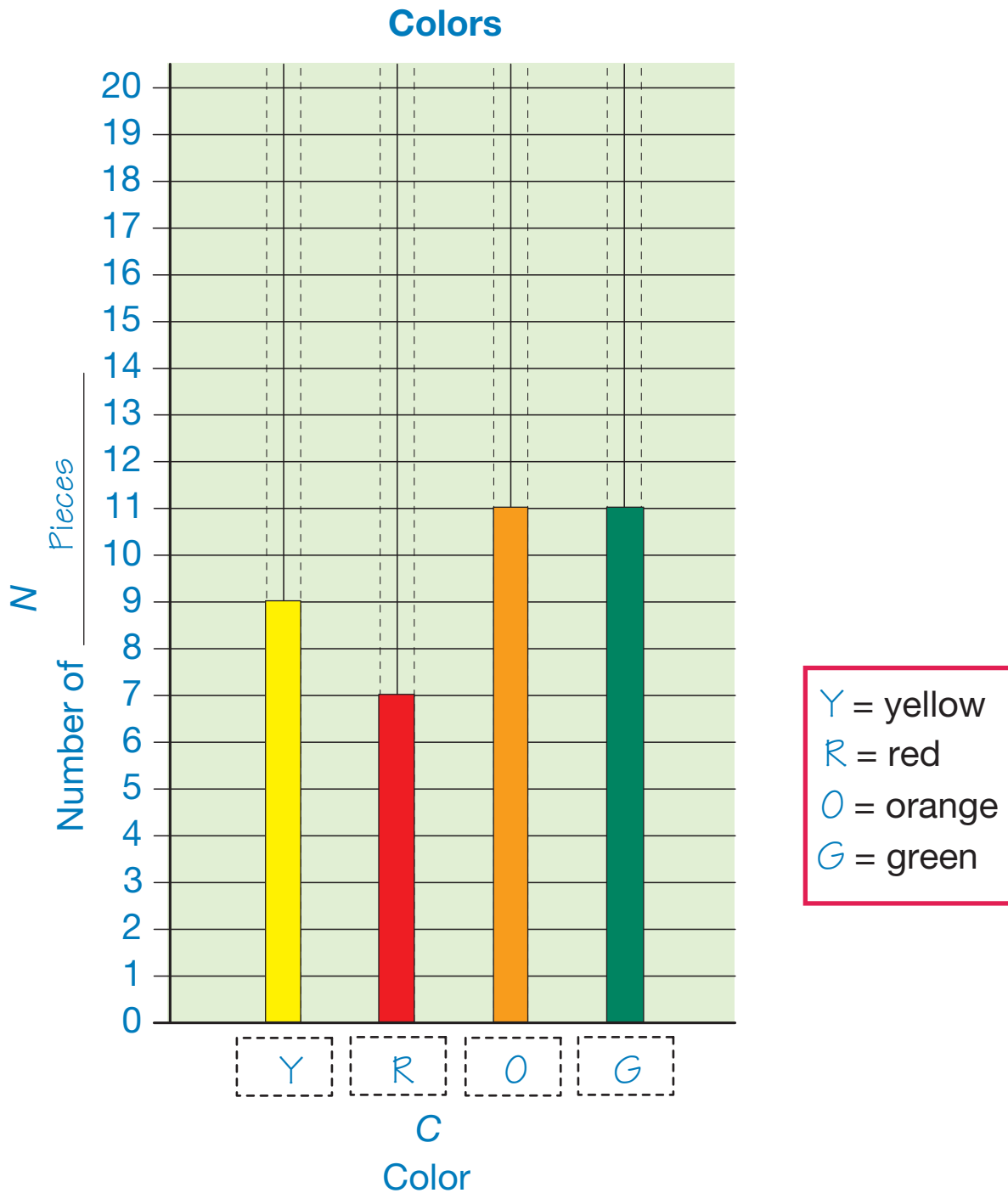
More Nan and Bert Problems
Check-In: Questions 1–3
Feedback Box

	Expectation	Check In	Comments
Use mental math strategies and reasoning strategies to solve addition problems with sums between 10 and 20.	E5		
Use strategies that apply the properties of addition to solve addition problems.	E6		

Copyright © Kendall Hunt Publishing Company

Nan and Bert's Graph

Nan and Bert took a scoop of cereal. They sorted the cereal by color and counted the pieces. Then they made a graph.



Use Nan and Bert's Graph. Write a number sentence. Show or tell how you solve each problem.

4. They put the yellow and red pieces together.
How many do they have?

Number sentence _____

5. How many more orange pieces did they count than red?

Number sentence _____

6. How many pieces of cereal were in Nan and Bert's scoop?

Number sentence _____