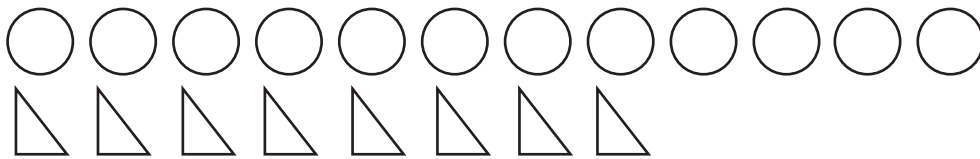


Compare Two Groups


For each problem, write a number sentence and draw a box around the answer. Show or tell how you solved each problem.

1. How many more ○ than △ ?




Number sentence _____

2. How many more 🍌 than 🍏 ?



Number sentence _____

3. How many more 👧 than 👦 ?



Number sentence _____