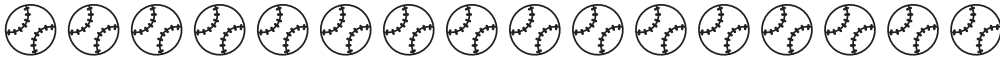



4. How many more  than  ?




Number sentence _____

5. How many more  than  ?



Number sentence _____

6. How many more  than  ?



Number sentence _____