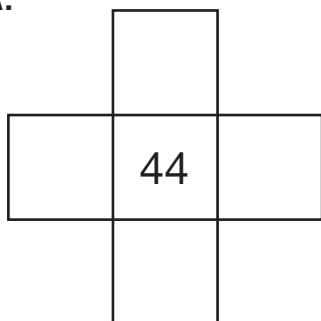


0 Target Numbers

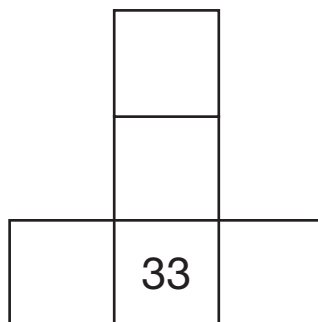


Fill in the boxes with numbers from the *100 Chart*.


A.



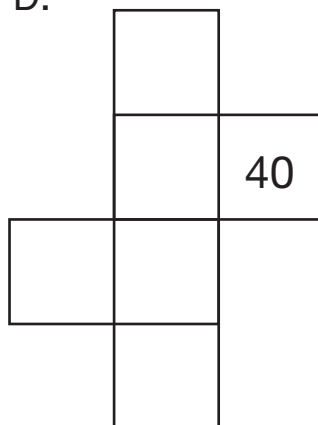
B.



C.



D.



p Doubles +1



Tell whether each answer is an even or odd number. Use connecting cubes.

A. $4 + 4 = \square$ _____

B. $\square = 5 + 4$ _____

C. $10 + 10 = \square$ _____

D. $10 + 11 = \square$ _____

E. $\square = 6 + 5$ _____

F. $\square = 6 + 6$ _____