




3. Build a cube model of Ruffy. Look at the different views.



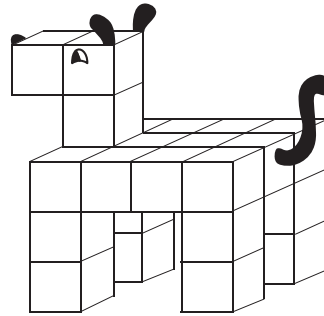
Front



Back



Side 1



Side 2

A. Ruffy has a volume of _____.

B. Show or tell how you found your answer.

4. A. How are Ruffy and the snake the same?

B. How are they different?