



 **Check-In: Questions 2–3**

2. Draw the hour and minute hand on the analog clock to match the time shown on the digital clock.

A.





B.



3. Write the time on the digital clock face to match the time shown on the analog clock.

A.



B.

