

**Part 5 Finish the Pattern**

1	2	3	4	5	6	7	8	9	10
11	12	13	14	15	16	17	18	19	20
21	22	23	24	25	26	27	28	29	30
31	32	33	34	35	36	37	38	39	40
41	42	43	44	45	46	47	48	49	50
51	52	53	54	55	56	57	58	59	60
61	62	63	64	65	66	67	68	69	70
71	72	73	74	75	76	77	78	79	80
81	82	83	84	85	86	87	88	89	90
91	92	93	94	95	96	97	98	99	100

- A.** 3, 6, 9, \_\_\_\_\_, 15, \_\_\_\_\_, \_\_\_\_\_
- B.** 16, 14, 12, \_\_\_\_\_, \_\_\_\_\_, 6, 4
- C.** 40, 35, \_\_\_\_\_, 25, 20, \_\_\_\_\_, \_\_\_\_\_
- D.** 60, 70, 80, \_\_\_\_\_, \_\_\_\_\_
- E.** 4, 8, 12, \_\_\_\_\_, \_\_\_\_\_
- F.** 13, 14, 23, 24, 33, \_\_\_\_\_, 43, \_\_\_\_\_
- G.** 6, 16, \_\_\_\_\_, \_\_\_\_\_, 46, 56, \_\_\_\_\_

**Part 6 Find the Total Value**

Find the total amount of money for each problem. Use labels to show what your numbers mean.


1.



\_\_\_\_\_ ¢

Number sentence \_\_\_\_\_


2.



\_\_\_\_\_ ¢

Number sentence \_\_\_\_\_


3.



\_\_\_\_\_ ¢

Number sentence \_\_\_\_\_

4.



\_\_\_\_\_ ¢

Number sentence \_\_\_\_\_