

Part 6 Find the Total Value

Find the total amount of money for each problem. Use labels to show what your numbers mean.


1.



_____ ¢

Number sentence _____


2.



_____ ¢

Number sentence _____


3.



_____ ¢

Number sentence _____

4.



_____ ¢

Number sentence _____