





Animal Boots



Dear Family Member:

In class we are solving problems with repeated addition. For example, the number of boots needed for 5 horses is $4 + 4 + 4 + 4 + 4 = 20$. Ask your child to explain to you how he or she solves these problems. Thank you.

A farmer wants to buy boots for his horses and chickens. How many boots will he need to buy? Fill in the last two rows.

	Animals	Number of Boots	Number Sentence
1.			
2.			
3.			
4.			
5.		16	
6.		18	

Draw a picture on the back to show one way to find the answer to Question 5.