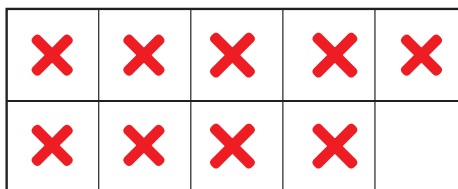
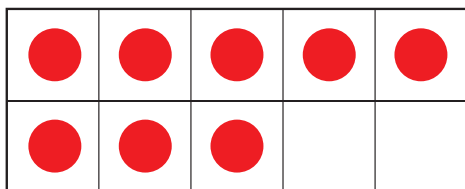


# Solve Doubles and Near Doubles

1. Show or tell how to use  $5 + 5$  to solve  $6 + 5$ .

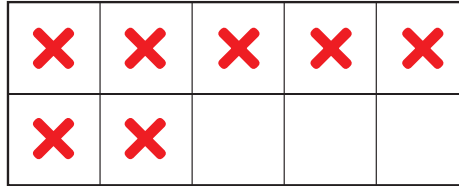

2. Look at the ten frames.



A. What addition fact is represented? \_\_\_\_\_

B. Show how to use the ten frames to solve the problem.

3. Look at the ten frames.



A. What addition fact is represented? \_\_\_\_\_

B. Show how to use the ten frames to solve the problem.

4. Show or tell how to solve  $15 + 5$ .

