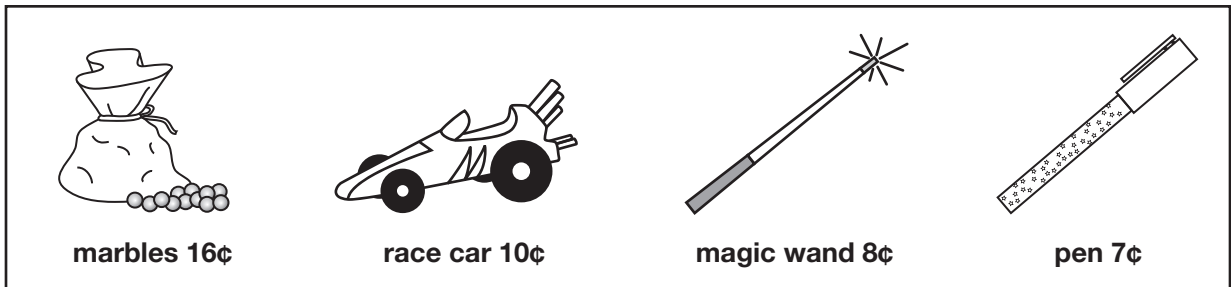


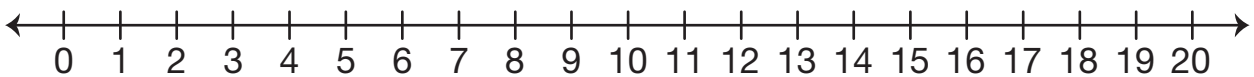
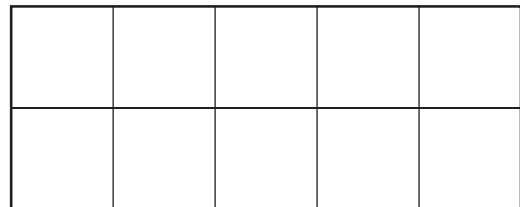
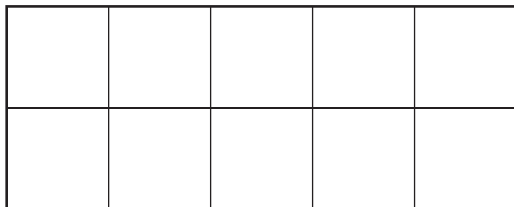
# Trip to Grandma's Corner Store

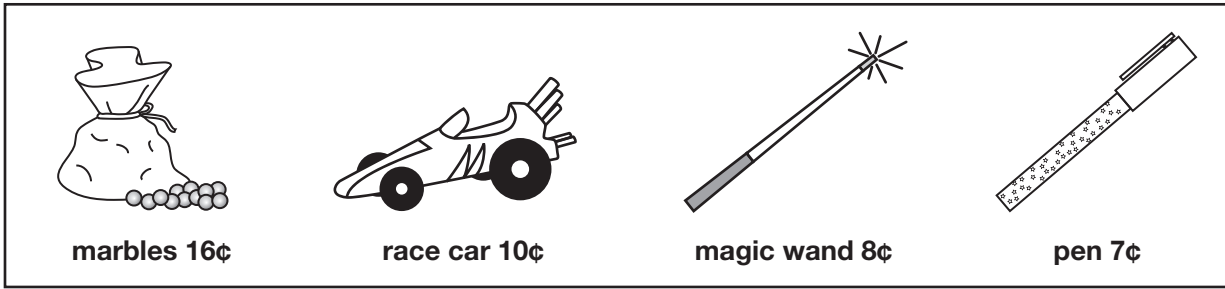
Solve the following problems. Show or tell how you solved them and write a number sentence for each problem. Use number lines, ten frames, connecting cubes, or a drawing to help you.



1. You have 15¢. You buy a magic wand. How much money do you have left?

Number sentence \_\_\_\_\_

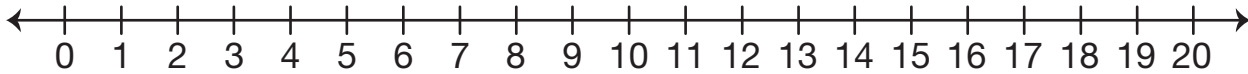




2. Mark has 9¢. How much more money does he need if he wants to buy the bag of marbles?

Number sentence \_\_\_\_\_

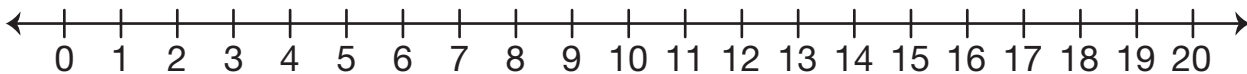


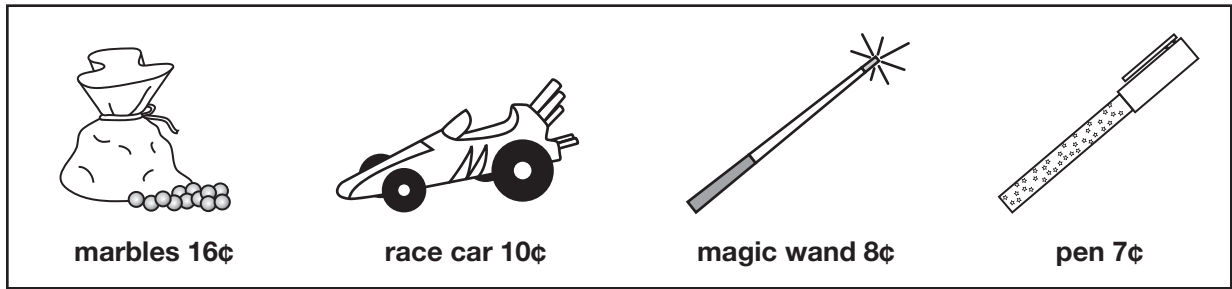


3. How much more is the race car than the pen?

Number sentence \_\_\_\_\_





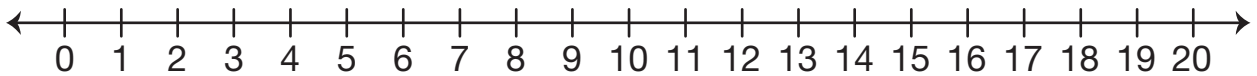


4. Nisha has 11¢. She buys something and now she has 4¢ left. What did she buy?

Nisha bought a \_\_\_\_\_.

Number sentence \_\_\_\_\_

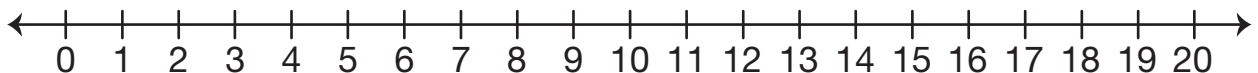


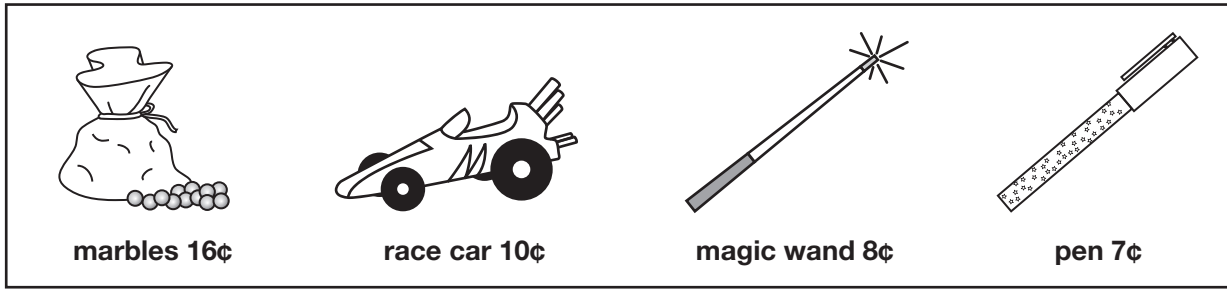


5. Yolanda's mother gave her some money. She buys a pen and then she has 5¢ left. How much money did her mother give her?

Number sentence \_\_\_\_\_



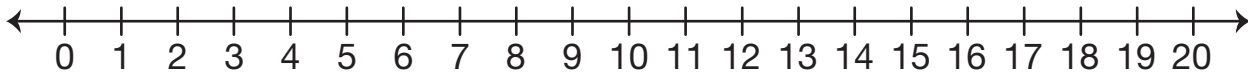




6. Darius has 13¢. He buys a magic wand. How much does he have left?

Number sentence \_\_\_\_\_





7. Emily saved some money. John gives her 3¢ so she can buy a wand. How much money did Emily have saved?

Number sentence \_\_\_\_\_



